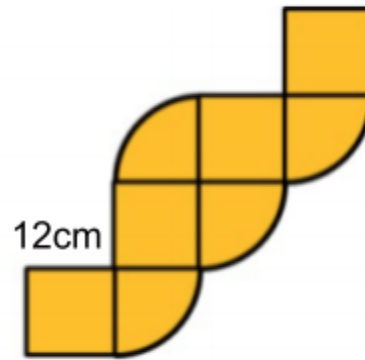
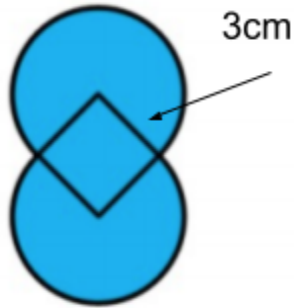
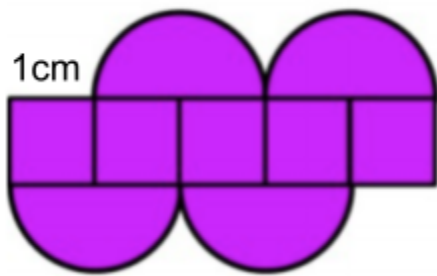


Designs Task

For each of the following shapes, list the shapes you see, then, find the area.



Work:

| | | |
|--|--|--|
| | | |
|--|--|--|