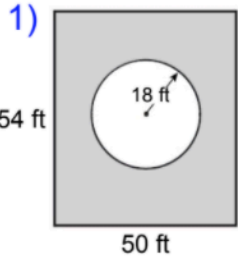
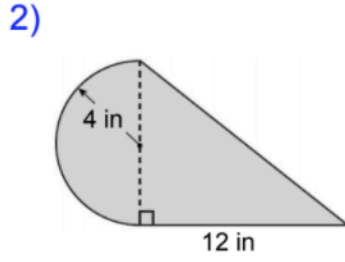


### Compound Shapes

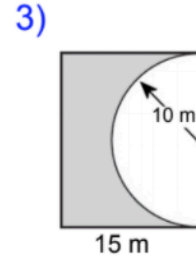
Find the area of each shaded region. SHOW WORK IN BOXES BELOW.



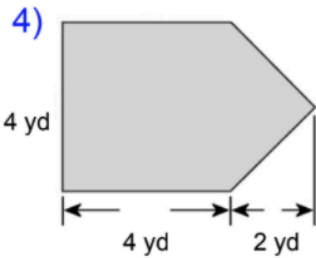
Area: \_\_\_\_\_



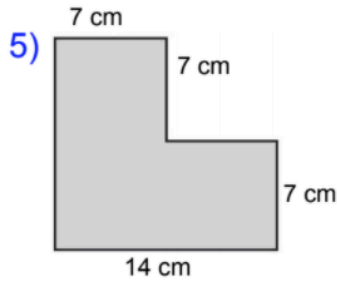
Area: \_\_\_\_\_



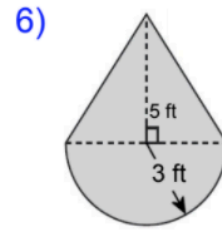
Area: \_\_\_\_\_



Area: \_\_\_\_\_



Area: \_\_\_\_\_



Area: \_\_\_\_\_