

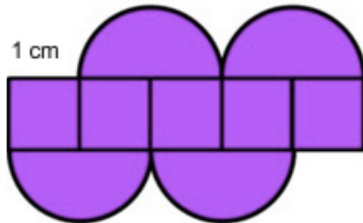
Name: \_\_\_\_\_

Period: \_\_\_\_\_

## Task - Composite Figure

### Part 1

For the following composite figure, describe the shapes you see.



---


---

---

---

### Part 2

Sketch the shapes you described in part 1.



### Part 3

Find the area of each shape. Then, find the total area of the shapes.

### Part 4

How are the area of the shapes and the area of the composite shape in Part 1 related?

---

---

---

---

---

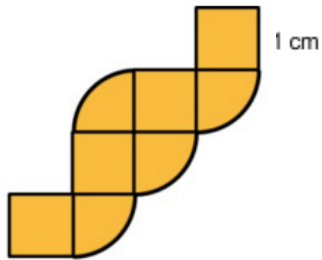
Name: \_\_\_\_\_

Period: \_\_\_\_\_

Part 5

*Find the area of each composite figure.*

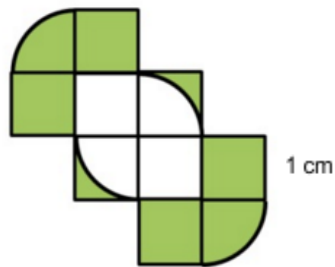
Figure A



Area: \_\_\_\_\_

---

Figure B



Area: \_\_\_\_\_

---

Figure C



Area: \_\_\_\_\_